

CALCULUS AB
SECTION I, Part B
Time—50 minutes
Number of questions—17

A GRAPHING CALCULATOR IS REQUIRED FOR SOME QUESTIONS ON THIS PART OF THE EXAMINATION.

Directions: Solve each of the following problems, using the available space for scratchwork. After examining the form of the choices, decide which is the best of the choices given and fill in the corresponding oval on the answer sheet. No credit will be given for anything written in the test book. Do not spend too much time on any one problem.

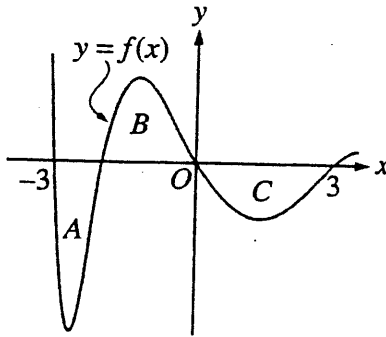
BE SURE YOU ARE USING PAGE 3 OF THE ANSWER SHEET TO RECORD YOUR ANSWERS TO QUESTIONS NUMBERED 76-92.

YOU MAY NOT RETURN TO PAGE 2 OF THE ANSWER SHEET.

In this test:

- (1) The exact numerical value of the correct answer does not always appear among the choices given. When this happens, select from among the choices the number that best approximates the exact numerical value.
- (2) Unless otherwise specified, the domain of a function f is assumed to be the set of all real numbers x for which $f(x)$ is a real number.
- (3) The inverse of a trigonometric function f may be indicated using the inverse function notation f^{-1} or with the prefix "arc" (e.g., $\sin^{-1} x = \arcsin x$).

76. A particle moves along the x -axis so that at any time $t \geq 0$, its velocity is given by $v(t) = 3 + 4.1 \cos(0.9t)$. What is the acceleration of the particle at time $t = 4$?
- (A) -2.016 (B) -0.677 (C) 1.633 (D) 1.814 (E) 2.978

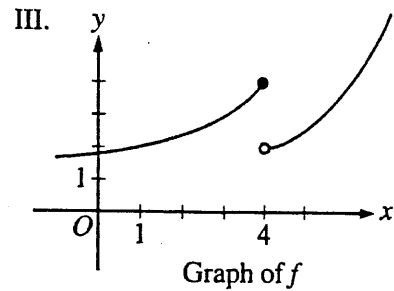
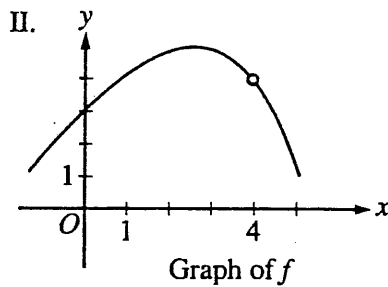
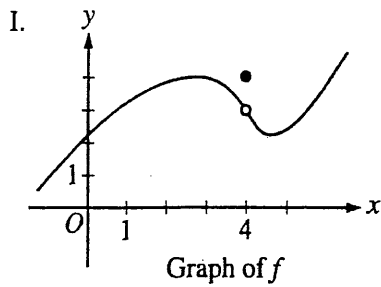


77. The regions A , B , and C in the figure above are bounded by the graph of the function f and the x -axis. If the area of each region is 2, what is the value of $\int_{-3}^3 (f(x) + 1) dx$?
- (A) -2 (B) -1 (C) 4 (D) 7 (E) 12

78. The radius of a circle is increasing at a constant rate of 0.2 meters per second. What is the rate of increase in the area of the circle at the instant when the circumference of the circle is 20π meters?

- (A) 0.04π m²/sec
- (B) 0.4π m²/sec
- (C) 4π m²/sec
- (D) 20π m²/sec
- (E) 100π m²/sec

79. For which of the following does $\lim_{x \rightarrow 4} f(x)$ exist?



- (A) I only
- (B) II only
- (C) III only
- (D) I and II only
- (E) I and III only

80. The function f is continuous for $-2 \leq x \leq 1$ and differentiable for $-2 < x < 1$. If $f(-2) = -5$ and $f(1) = 4$, which of the following statements could be false?
- (A) There exists c , where $-2 < c < 1$, such that $f(c) = 0$.
- (B) There exists c , where $-2 < c < 1$, such that $f'(c) = 0$.
- (C) There exists c , where $-2 < c < 1$, such that $f(c) = 3$.
- (D) There exists c , where $-2 < c < 1$, such that $f'(c) = 3$.
- (E) There exists c , where $-2 \leq c \leq 1$, such that $f(c) \geq f(x)$ for all x on the closed interval $-2 \leq x \leq 1$.
-

81. Let f be the function with derivative given by $f'(x) = \sin(x^2 + 1)$. How many relative extrema does f have on the interval $2 < x < 4$?
- (A) One (B) Two (C) Three (D) Four (E) Five
-

82. The rate of change of the altitude of a hot-air balloon is given by $r(t) = t^3 - 4t^2 + 6$ for $0 \leq t \leq 8$. Which of the following expressions gives the change in altitude of the balloon during the time the altitude is decreasing?

(A) $\int_{1.572}^{3.514} r(t) dt$

(B) $\int_0^8 r(t) dt$

(C) $\int_0^{2.667} r(t) dt$

(D) $\int_{1.572}^{3.514} r'(t) dt$

(E) $\int_0^{2.667} r'(t) dt$

83. The velocity, in ft/sec, of a particle moving along the x -axis is given by the function $v(t) = e^t + te^t$. What is the average velocity of the particle from time $t = 0$ to time $t = 3$?
- (A) 20.086 ft/sec
(B) 26.447 ft/sec
(C) 32.809 ft/sec
(D) 40.671 ft/sec
(E) 79.342 ft/sec
-

84. A pizza, heated to a temperature of 350 degrees Fahrenheit ($^{\circ}\text{F}$), is taken out of an oven and placed in a 75°F room at time $t = 0$ minutes. The temperature of the pizza is changing at a rate of $-110e^{-0.4t}$ degrees Fahrenheit per minute. To the nearest degree, what is the temperature of the pizza at time $t = 5$ minutes?
- (A) 112°F (B) 119°F (C) 147°F (D) 238°F (E) 335°F
-

85. The base of a solid is the region in the first quadrant bounded by the y -axis, the graph of $y = \tan^{-1} x$, the horizontal line $y = 3$, and the vertical line $x = 1$. For this solid, each cross section perpendicular to the x -axis is a square. What is the volume of the solid?
- (A) 2.561 (B) 6.612 (C) 8.046 (D) 8.755 (E) 20.773

-
86. The function f has first derivative given by $f'(x) = \frac{\sqrt{x}}{1+x+x^3}$. What is the x -coordinate of the inflection point of the graph of f ?
- (A) 1.008 (B) 0.473 (C) 0 (D) -0.278 (E) The graph of f has no inflection point.
-

87

87. Let f be a differentiable function with $f(2) = 3$ and $f'(2) = -5$, and let g be the function defined by $g(x) = xf(x)$. Which of the following is an equation of the line tangent to the graph of g at the point where $x = 2$?

- (A) $y = 3x$
(B) $y - 3 = -5(x - 2)$
(C) $y - 6 = -5(x - 2)$
(D) $y - 6 = -7(x - 2)$
(E) $y - 6 = -10(x - 2)$

88

88. For all x in the closed interval $[2, 5]$, the function f has a positive first derivative and a negative second derivative. Which of the following could be a table of values for f ?

(A)

x	$f(x)$
2	7
3	9
4	12
5	16

(B)

x	$f(x)$
2	7
3	11
4	14
5	16

(C)

x	$f(x)$
2	16
3	12
4	9
5	7

(D)

x	$f(x)$
2	16
3	14
4	11
5	7

(E)

x	$f(x)$
2	16
3	13
4	10
5	7

89.

- A particle moves along the x -axis so that at any time $t > 0$, its acceleration is given by $a(t) = \ln(1 + 2^t)$. If the velocity of the particle is 2 at time $t = 1$, then the velocity of the particle at time $t = 2$ is
- (A) 0.462 (B) 1.609 (C) 2.555 (D) 2.886 (E) 3.346

90.

- Let g be the function given by $g(x) = \int_0^x \sin(t^2) dt$ for $-1 \leq x \leq 3$. On which of the following intervals is g decreasing?
- (A) $-1 \leq x \leq 0$
(B) $0 \leq x \leq 1.772$
(C) $1.253 \leq x \leq 2.171$
(D) $1.772 \leq x \leq 2.507$
(E) $2.802 \leq x \leq 3$

END OF SECTION I

AFTER TIME HAS BEEN CALLED, TURN TO THE NEXT PAGE AND
ANSWER QUESTIONS 93-96.

