

1.2 Functions and Their Properties

Increasing/Decreasing, Maxima/Minima, Boundedness of Functions

Target 1B: Analyze functions using specific properties

Review of Prior Concepts

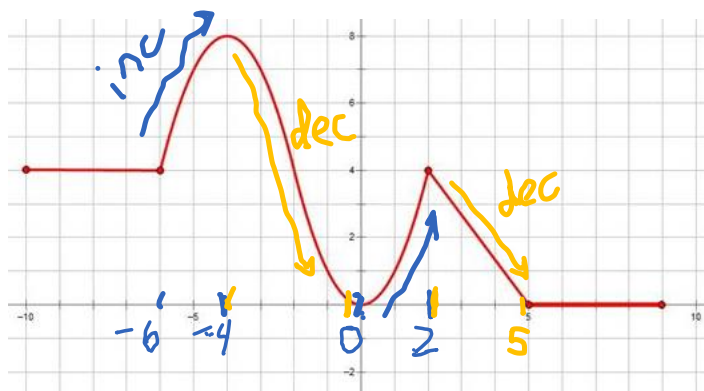
A graph of $f(x)$ is given at the right.

1. On what interval(s) is $f(x)$ increasing?

$(-6, -4) \cup (0, 2)$

2. On what interval(s) is $f(x)$ decreasing?

$(-4, 0) \cup (2, 5)$



More Practice

Intervals of Increasing/Decreasing

<https://www.youtube.com/watch?v=r9cWE-kkU7A>

<http://braingenie.ck12.org/skills/105853?assignment=25581>

<https://www.mathsisfun.com/sets/functions-increasing.html>

SAT Connection

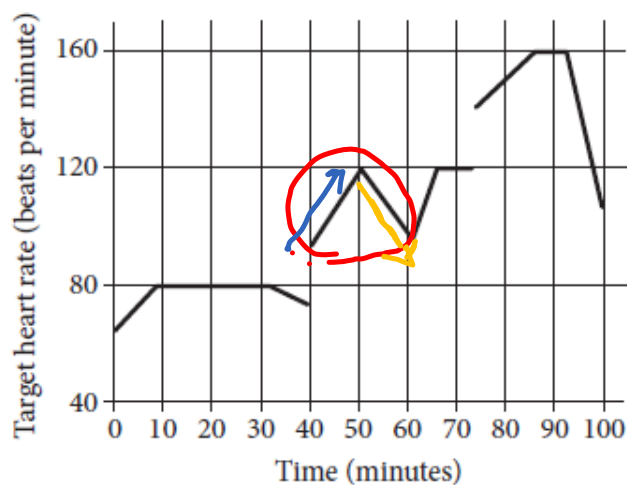
Problem Solving and Data Analysis

5. Use the relationship between two variables to investigate key features of the graph.

Example:

John runs at different speeds as part of his training program. The graph shows his target heart rate at different times during his workout. On which interval is the target heart rate strictly increasing then strictly decreasing?

need ... 😊



A) Between 0 and 30 minutes

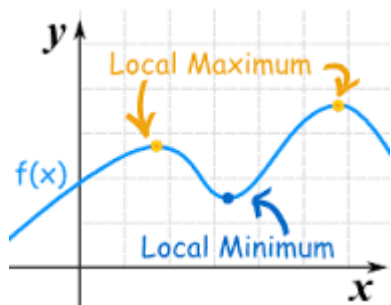
B) Between 40 and 60 minutes

C) Between 50 and 65 minutes

D) Between 70 and 90 minutes

Solution

Local Maxima & Minima




In your words,

Local Maximum Value

the y-value of a high point

Local Minimum Value

the y-value of a low point



Example 1: A graph of $g(x)$ is given at the right.

a) Identify any local minimum point(s).

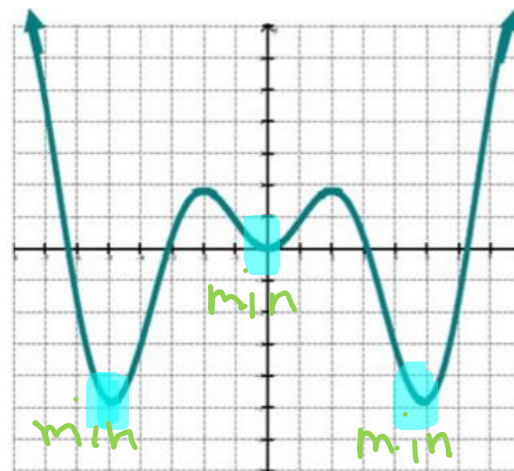
$(-5, -5), (0, 0), (5, -5)$

b) Identify any local minimum value(s).

-5 and 0

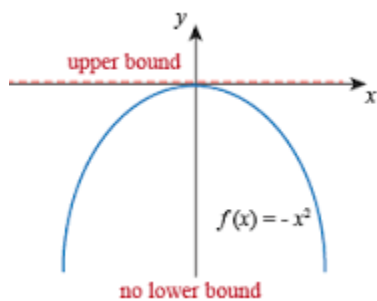
c) Identify any x-value(s) where a local minimum occurs.

$x = -5, x = 0, x = 5$

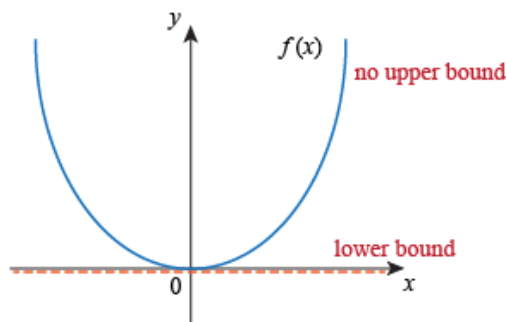


Boundedness

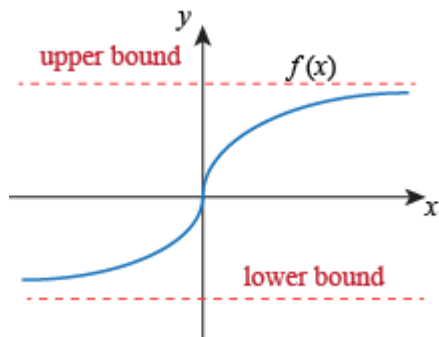
Bounded Above



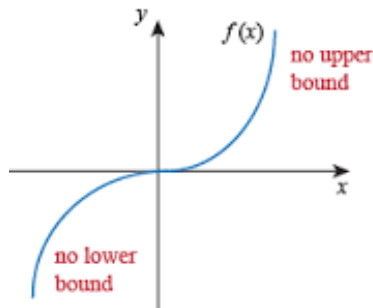
Bounded Below



Bounded



Not Bounded



Unit 1 (Chapter 1): Functions

Pre-Calculus 2016-2017

Example 2: A graph of $g(x)$ is given at the right.

- a) Identify any local minimum value(s).

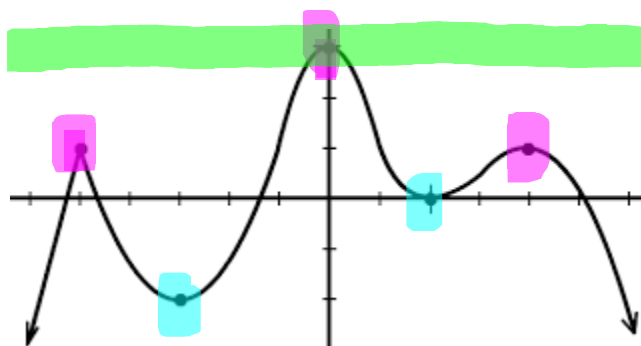
-2 and 0

- b) Identify any local maximum value(s).

1 and 3

- c) Is the function bounded above, bounded below, bounded, or not bounded on its domain?

bounded above



Example 3: A graph of $g(x)$ is given at the right.

- a) Identify any local minimum value(s).

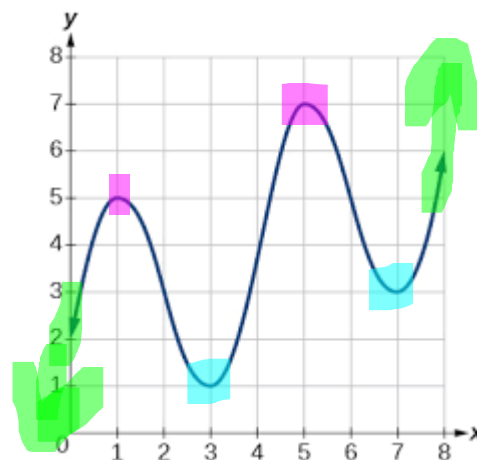
1 and 3

- b) Identify any local maximum value(s).

5 and 7

- c) Is the function bounded above, bounded below, bounded, or not bounded on its domain?

not bounded



More Practice

Maxima/Minima

<http://www.coolmath.com/precalculus-review-calculus-intro/precalculus-algebra/12-relative-extrema-minimums-maximums-01>

<https://www.youtube.com/watch?v=07DxrU5ZCEc>

<https://www.youtube.com/watch?v=hmyM7fVHp8M>

Boundedness

<https://www.youtube.com/watch?v=ct5-NGtfBRk>

http://www.vitutor.com/calculus/functions/bounded_functions.html

Homework Assignment

p.98 #22,23,24,25,27,30,33

SAT Connection
Solution

Choice B is correct. On the graph, a line segment with a positive slope represents an interval over which the target heart rate is strictly increasing as time passes. A horizontal line segment represents an interval over which there is no change in the target heart rate as time passes, and a line segment with a negative slope represents an interval over which the target heart rate is strictly decreasing as time passes. Over the interval between 40 and 60 minutes, the graph consists of a line segment with a positive slope followed by a line segment with a negative slope, with no horizontal line segment in between, indicating that the target heart rate is strictly increasing then strictly decreasing.

Choice A is incorrect because the graph over the interval between 0 and 30 minutes contains a horizontal line segment, indicating a period in which there was no change in the target heart rate. Choice C is incorrect because the graph over the interval between 50 and 65 minutes consists of a line segment with a negative slope followed by a line segment with a positive slope, indicating that the target heart rate is strictly decreasing then strictly increasing. Choice D is incorrect because the graph over the interval between 70 and 90 minutes contains horizontal line segments and no segment with a negative slope.